



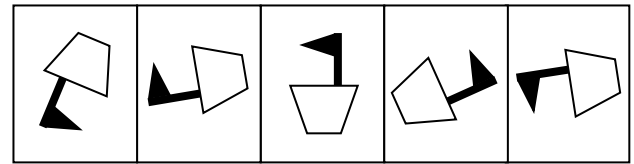
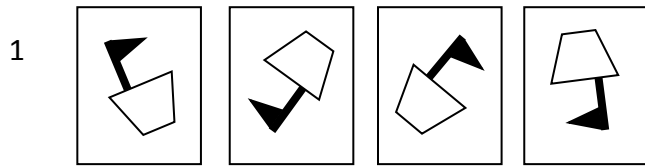
NVR Similarities – Sample Questions

Which picture on the right belongs to the group on the left? Circle your answers.

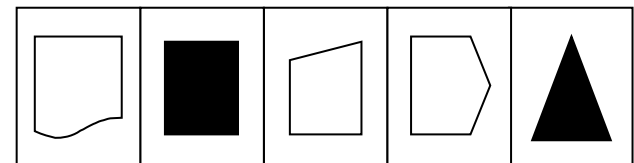
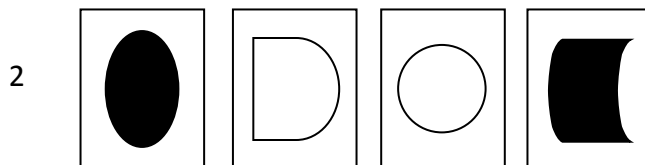
Example:



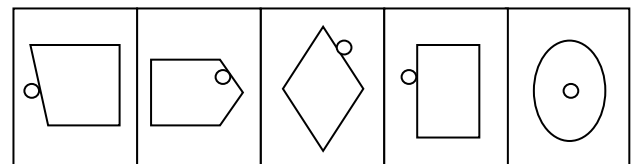
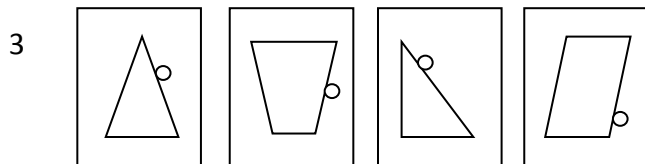
A **B** C D E



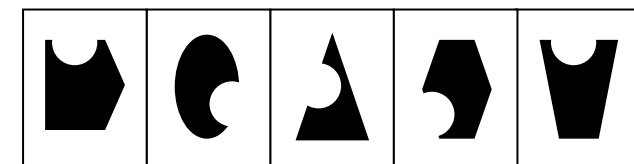

A B C D E



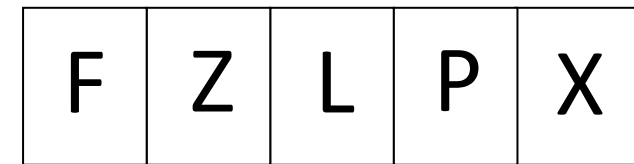
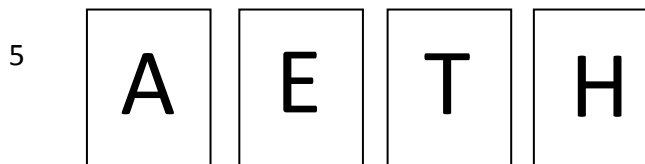
A B C D E



A B C D E



A B C D E



A B C D E

NVR Similarities – Sample Questions

Answers

Example: B – each picture is a black quadrilateral

1. B - each picture is a rotation of the same image
2. A – each picture has a shape with a curved edge
3. C – each picture has a circle on the right outside edge of the shape
4. E – each picture is a quadrilateral with part of a circle cut out
5. E – each picture is symmetrical

Need more practice? Try our [Mocks in a Box](#) - all you need for realistic 11+ mock test practice at home in one handy box!