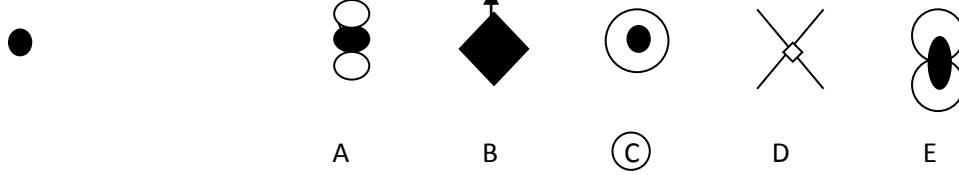


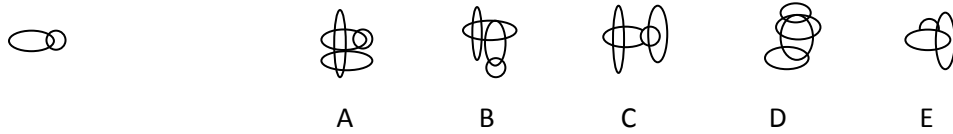
NVR Hidden Shapes – Sample Questions

In which larger shape on the right is the shape on the left hidden? Circle your answers.

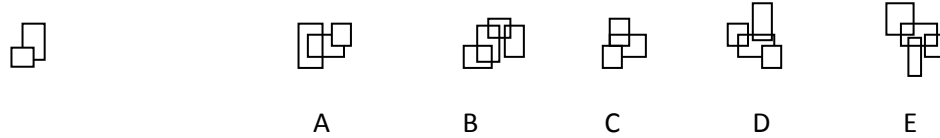
Example:



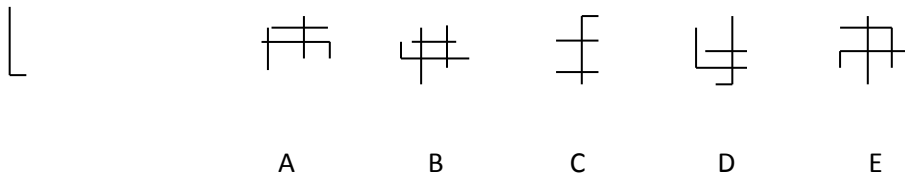
1.



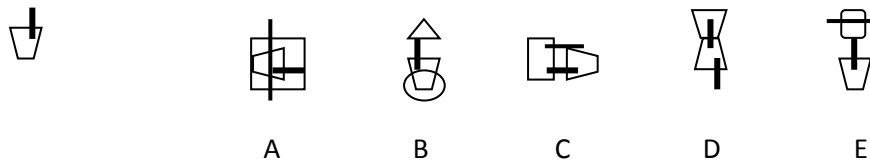
2.



3.





4.





NVR Hidden Shapes – Sample Questions

Answers:

1. B 

2. D 

3. E 

4. A 

Need more practice? Try our [Mocks in a Box](#) - all you need for realistic 11+ mock test practice at home in one handy box!