


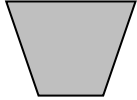
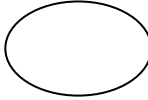



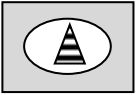
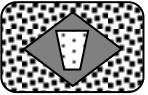
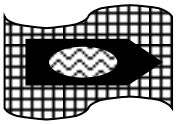
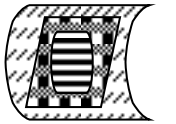

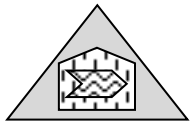
NVR Codes – Sample Questions

Which code describes the final picture? Circle your answers.


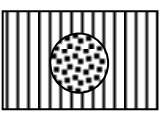
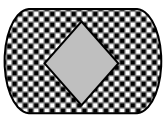
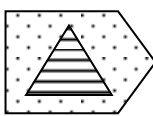
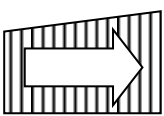

Example:

| | | | | | |
|--|---|---|---|---|---|
|  |  |  |  |  |  |
| RG | DC | RL | HK | SC | HG DL SK RC DK |
| | | | | | A B C D E |

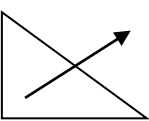
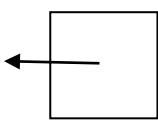
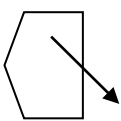
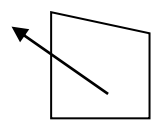
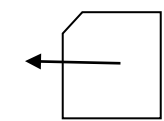
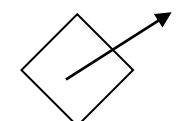
1.

| | | | | | |
|--|---|---|---|---|---|
|  |  |  |  |  |  |
| RF | DC | PM | RN | SC | PF RM SM PC DN |
| | | | | | A B C D E |

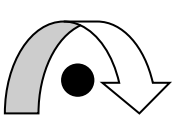
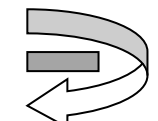
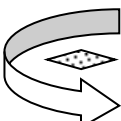
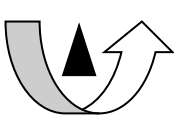
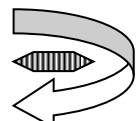
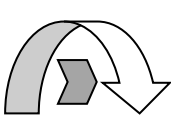
2.

| | | | | | |
|--|---|---|---|--|---|
|  |  |  |  |  |  |
| MV | AX | MG | ST | PX | AT SX AG MV MX |
| | | | | | A B C D E |

3.

| | | | | | |
|--|---|---|---|--|---|
|  |  |  |  |  |  |
| VC | YH | LZ | GZ | YU | VZ LC GH VH YC |
| | | | | | A B C D E |

4.

| | | | | | |
|--|---|---|---|---|---|
|  |  |  |  |  |  |
| QE | DF | UF | AC | DZ | AF QZ DE UE QF |
| | | | | | A B C D E |

NVR Codes – Sample Questions

Answers

Example - 1st letter: shading; 2nd letter: shape

1. A - 1st letter: fill pattern of central shape; 2nd letter: fill pattern of outside shape
2. C - 1st letter: internal shape; 2nd letter: outside shape fill pattern
3. D - 1st letter: arrow direction; 2nd letter: number of right angles
4. B - 1st letter: arrow direction; 2nd letter: number of sides of shape

Need more practice? Try our [Mocks in a Box](#) - all you need for realistic 11+ mock test practice at home in one handy box!